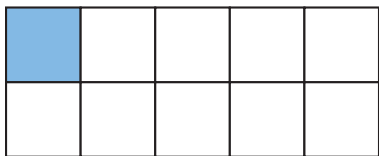


# ARBETSBLAD 4

## Bråkform och decimalform (I)

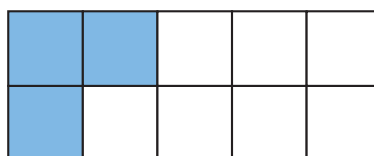
Hur stor andel är färgad? Svara i både bråkform och decimalform.

1



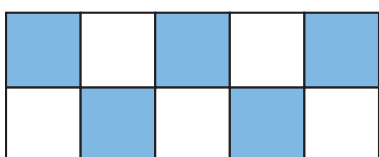
$$\frac{\quad}{\quad} = \frac{\quad}{\quad}$$

2




$$\frac{\quad}{\quad} = \frac{\quad}{\quad}$$

3



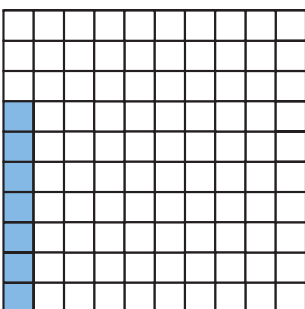
$$\frac{\quad}{\quad} = \frac{\quad}{\quad}$$

4



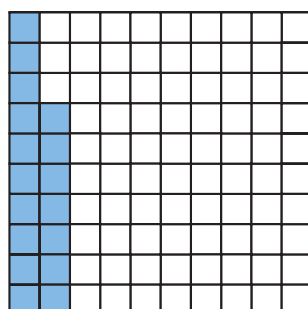
$$\frac{\quad}{\quad} = \frac{\quad}{\quad}$$

5



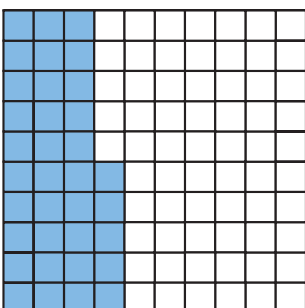
$$\frac{\quad}{\quad} = \frac{\quad}{\quad}$$

6



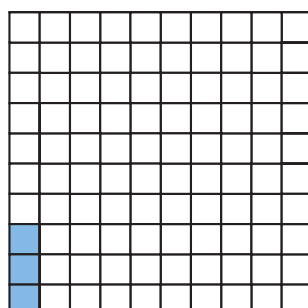
$$\frac{\quad}{\quad} = \frac{\quad}{\quad}$$

7



$$\frac{\quad}{\quad} = \frac{\quad}{\quad}$$

8



$$\frac{\quad}{\quad} = \frac{\quad}{\quad}$$

## ARBETSBLAD 4 – FACIT

---

### Bråkform och decimalform (I)

1  $\frac{1}{10} = 0,1$

2  $\frac{3}{10} = 0,3$

3  $\frac{5}{10} = 0,5$

4  $\frac{9}{10} = 0,9$

5  $\frac{7}{100} = 0,07$

6  $\frac{17}{100} = 0,17$

7  $\frac{35}{100} = 0,35$

8  $\frac{3}{100} = 0,03$