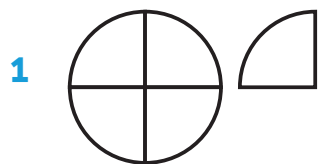



ARBETSBLAD 32

Bråkform och blandad form




Blandad form: _____

Bråkform: _____




Blandad form: _____

Bråkform: _____



Blandad form: _____

Bråkform: _____



Blandad form: _____

Bråkform: _____

Skriv i bråkform.

5 a) $2\frac{2}{5} = \underline{\hspace{2cm}}$

b) $1\frac{3}{4} = \underline{\hspace{2cm}}$

c) $3\frac{1}{2} = \underline{\hspace{2cm}}$

6 a) $1\frac{7}{8} = \underline{\hspace{2cm}}$

b) $4\frac{1}{4} = \underline{\hspace{2cm}}$

c) $1\frac{4}{5} = \underline{\hspace{2cm}}$

7 a) $2\frac{5}{6} = \underline{\hspace{2cm}}$

b) $3\frac{2}{7} = \underline{\hspace{2cm}}$

c) $4\frac{3}{8} = \underline{\hspace{2cm}}$

Skriv i blandad form.

8 a) $\frac{3}{2} = \underline{\hspace{2cm}}$

b) $\frac{12}{5} = \underline{\hspace{2cm}}$

c) $\frac{11}{3} = \underline{\hspace{2cm}}$

9 a) $\frac{15}{4} = \underline{\hspace{2cm}}$

b) $\frac{8}{3} = \underline{\hspace{2cm}}$

c) $\frac{11}{2} = \underline{\hspace{2cm}}$

10 a) $\frac{13}{4} = \underline{\hspace{2cm}}$

b) $\frac{23}{5} = \underline{\hspace{2cm}}$

c) $\frac{19}{6} = \underline{\hspace{2cm}}$

ARBETSBLAD 32 – FACIT

Bråkform och blandad form

1 Blandad form: $1\frac{1}{4}$

Bråkform: $\frac{5}{4}$

2 Blandad form: $1\frac{2}{3}$

Bråkform: $\frac{5}{3}$

3 Blandad form: $2\frac{1}{2}$

Bråkform: $\frac{5}{2}$

4 Blandad form: $2\frac{3}{5}$

Bråkform: $\frac{13}{5}$

5 a) $\frac{12}{5}$

b) $\frac{7}{4}$

c) $\frac{7}{2}$

6 a) $\frac{15}{8}$

b) $\frac{17}{4}$

c) $\frac{9}{5}$

7 a) $\frac{17}{6}$

b) $\frac{23}{7}$

c) $\frac{35}{8}$

8 a) $1\frac{1}{2}$

b) $2\frac{2}{5}$

c) $3\frac{2}{3}$

9 a) $3\frac{3}{4}$

b) $2\frac{2}{3}$

c) $5\frac{1}{2}$

10 a) $3\frac{1}{4}$

b) $4\frac{3}{5}$

c) $3\frac{1}{6}$