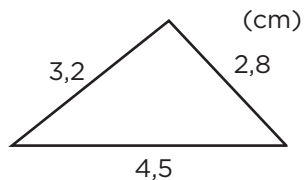


# ARBETSBLAD 50


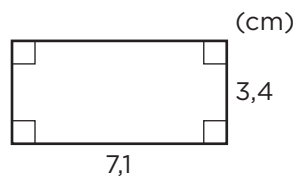
## Omkrets

1 Beräkna omkretsen.

a)



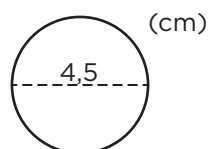
b)




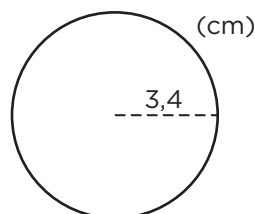
2 Beräkna cirklarnas omkrets. Avrunda till hela centimeter.




a)



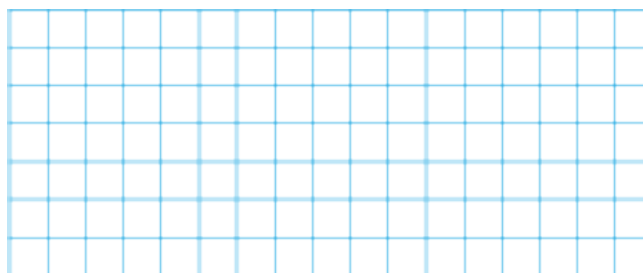
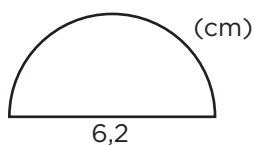
b)



3 En cirkels omkrets är 25,5 cm. Hur lång är diametern? Avrunda till tiondels centimeter.



4 Hur lång omkrets har halvcirkeln? Avrunda till hela centimeter.



## ARBETSBLAD 50 – FACIT

---

### Omkrets

- 1 a) 10,5 cm  
b) 21 cm
- 2 a) 14 cm  
b) 21 cm
- 3 8,1 cm
- 4 16 cm